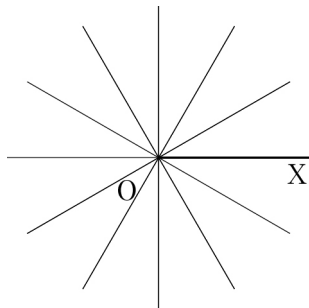
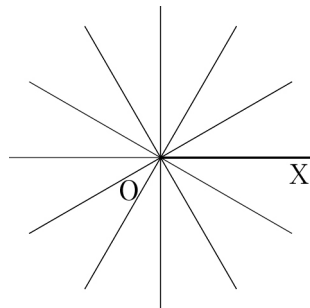


1 次の角の動径 OP を図示しなさい。

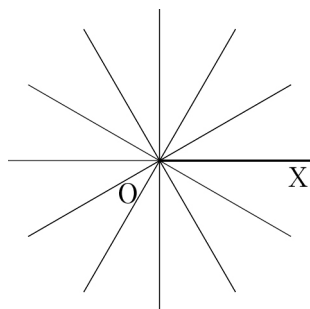
(1)  $120^\circ$



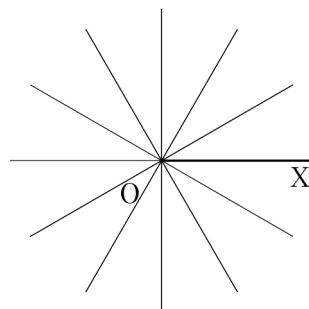
(2)  $600^\circ$



(3)  $-210^\circ$



(4)  $-420^\circ$



2 次の角は、それぞれ第何象限の角であるか答えなさい。

(1)  $400^\circ$

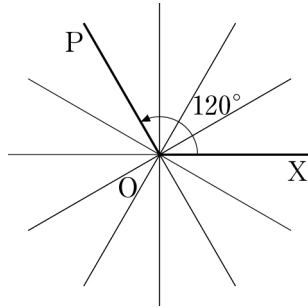
(2)  $960^\circ$

(3)  $-250^\circ$

1 次の角の動径 OP を図示しなさい。

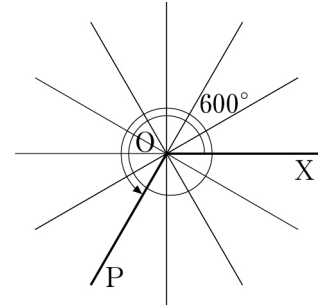
(1)  $120^\circ$

[解]



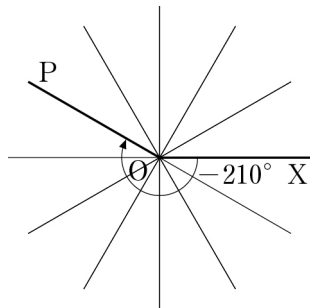
(2)  $600^\circ$

[解]



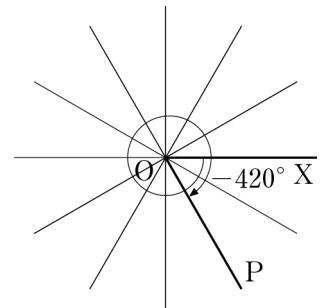
(3)  $-210^\circ$

[解]



(4)  $-420^\circ$

[解]

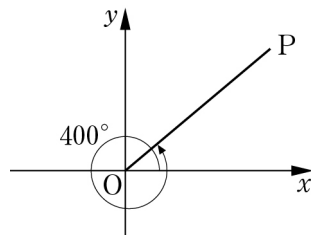


2 次の角は、それぞれ第何象限の角であるか答えなさい。

(1)  $400^\circ$

[解]

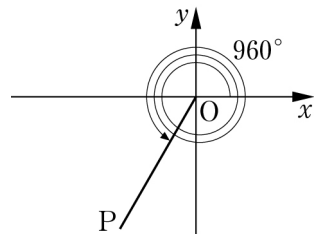
第1象限



(2)  $960^\circ$

[解]

第3象限



(3)  $-250^\circ$

[解]

第2象限

